

Calculation Countdown

w/c 27.4.20

$12 \times 10 = \boxed{}$

$\boxed{} + 8 = 10 + 10$

$\boxed{} \times 5 = 55$

$49 + 43 = \boxed{}$

$10 \div 10 = \boxed{}$

$54 - 25 = \boxed{}$

$12 \div 2 = \boxed{}$

$2/4 \text{ of } 24 = \boxed{}$

$1/4 \text{ of } 40 = \boxed{}$

$3/4 \text{ of } 4 = \boxed{}$

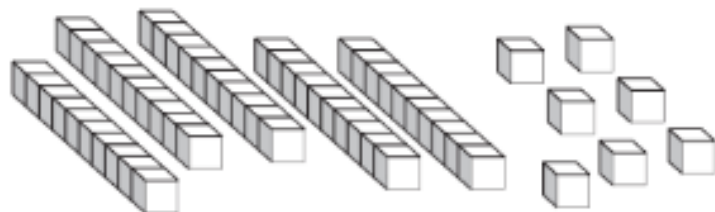
Concept Countdown

w/c 27.4.20

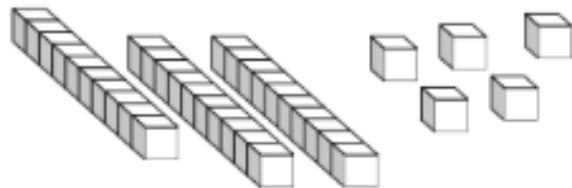
Shade $\frac{1}{3}$ of the shape.



Seb makes this number.



Kim makes this number.




What is the total of their numbers?




Class 2 vote for their favourite ice-cream flavour.

They record their results in a tally chart.

Ice-cream flavour	Tally
Strawberry	
Vanilla	
Banana	
Chocolate	

Complete the pictogram to show how many children chose banana.

 = 2 children

Strawberry	
Vanilla	
Banana	
Chocolate	

How many **more** children chose vanilla than chocolate?