



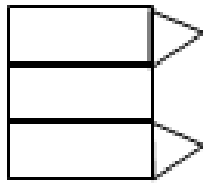
# Match the Nets



A

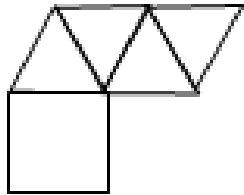


B

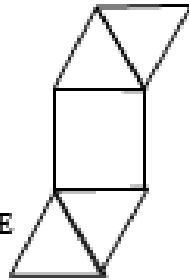


C

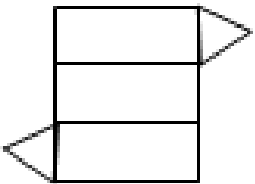
Can you match the correct net with its 3D shape?



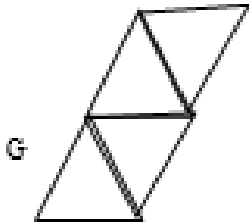
D



E




F




G


Net	Shape




1




2



3



4

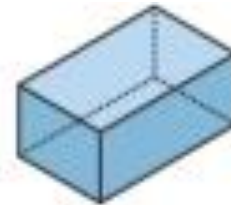


5

Can you create nets for these shapes?



Cube



Cuboid



Cylinder



Hexagonal prism



Square-based pyramid



Tetrahedron (triangle-based pyramid)



Triangular prism