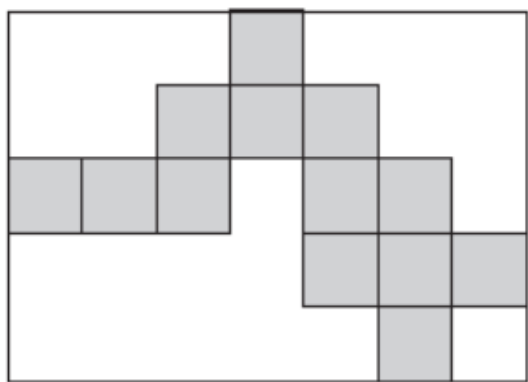


Countdown 5

1. 542.4 divided by 4
2. 517×26
3. Divide 215 by 26
4. Place these in order largest to smallest
9/10 0.5 30% 0.1 60/100
5. 2314×4
6. Here is a rectangle with 13 identical shaded squares inside it.



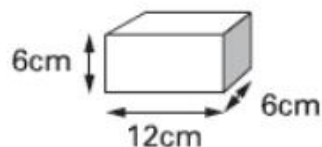
What fraction of the rectangle is shaded?

7. Convert 6.5m into cm
Convert 56m 2cm into m

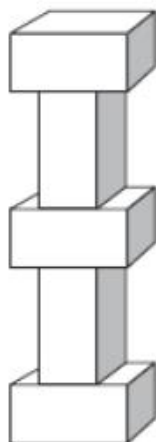
8.

Martin has some bricks.

They are 12cm long, 6cm high and 6cm deep.



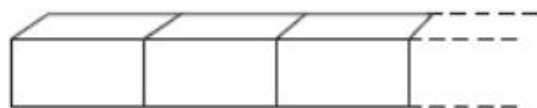
He builds this tower with five bricks.



How tall is the tower?

9. Each brick is 12cm long.

Martin makes a line of bricks 132cm long.



How many bricks does he use?