







There were 20 cakes in the shop. The girl bought 7 cakes. How many were left?



1 2 3 4 5 6 7 8 9 10 11 12 13 14 15 16 17 18 19 20

There were 20 footballs in the shop. The girl bought 10 footballs. How many were left?



1 2 3 4 5 6 7 8 9 10 11 12 13 14 15 16 17 18 19 20